


Division using pictures

Name: _____ Class: _____ Date: _____

Mark / 10 %

1) The picture below shows that $7 \times 2 = 14$.

[1]




Write a division sentence for the same picture.

$$\boxed{} \div \boxed{} = 2$$

2) The picture below shows that $10 \times 2 = 20$.

[1]




Write a division sentence for the same picture.

$$\boxed{} \div \boxed{}$$

3) The picture below shows that $5 \times 5 = 25$.

[1]




Write a division sentence for the same picture.

$$\boxed{} \div \boxed{} = 5$$

4) The picture below shows that $10 \times 9 = 90$.

[1]




Write a division sentence for the same picture.

$$\boxed{} \div \boxed{}$$

5) The picture below shows that $4 \times 3 = 12$.

[1]




Write a division sentence for the same picture.

$$\boxed{} \div \boxed{} = 4$$

6) The picture below shows that $8 \times 4 = 32$.

[1]




Write a division sentence for the same picture.

$$\boxed{} \div \boxed{} = 8$$

7) The picture below shows that $6 \times 6 = 36$.

[1]




Write a division sentence for the same picture.

<input type="text"/>	÷	<input type="text"/>
----------------------	---	----------------------

8) The picture below shows that $8 \times 8 = 64$.

[1]




Write a division sentence for the same picture.

<input type="text"/>	÷	<input type="text"/>
----------------------	---	----------------------

9) The picture below shows that $8 \times 10 = 80$.

[1]




Write a division sentence for the same picture.

$$\boxed{} \div \boxed{} = 10$$

10) The picture below shows that $9 \times 8 = 72$.

[1]



Write a division sentence for the same picture.

$$\boxed{} \div \boxed{} = 9$$

Solutions for the assessment Division using pictures

1) $14 \div 7 = 2$

2) $20 \div 2 = 10$

3) $25 \div 5 = 5$

4) $90 \div 10 = 9$

5) $12 \div 3 = 4$

6) $32 \div 4 = 8$

7) $36 \div 6 = 6$

8) $64 \div 8 = 8$

9) $80 \div 8 = 10$

10) $72 \div 8 = 9$